

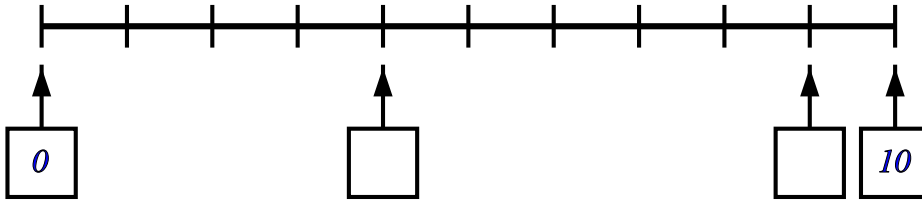
Number line - whole numbers and decimals

Name: _____ Class: _____ Date: _____

Mark / 12 %

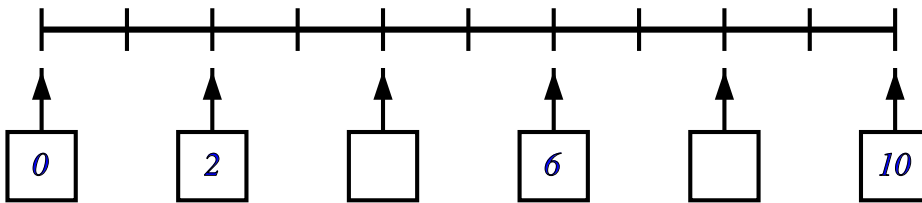
1) Write in the missing numbers

[1]



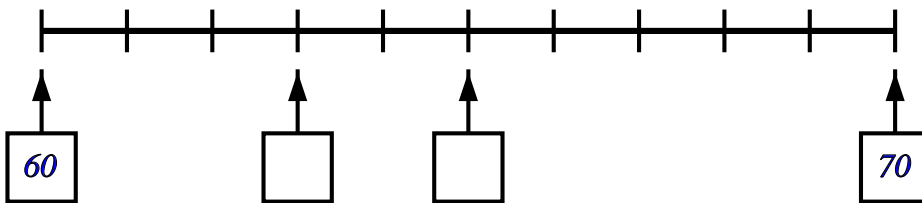
2) Write in the missing numbers

[1]



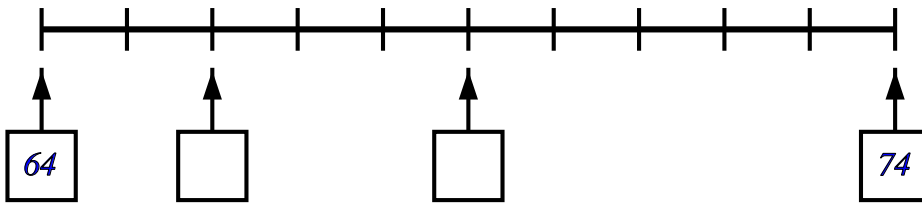
3) Write in the missing numbers

[1]



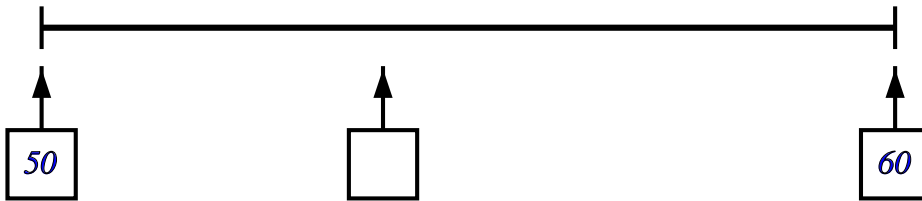
4) Write in the missing numbers

[1]



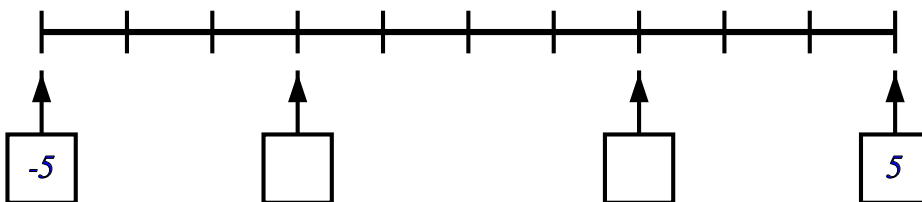
5) Write in the missing number

[1]



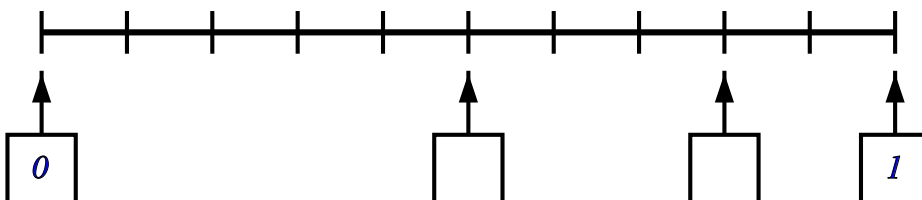
6) Write in the missing numbers

[1]



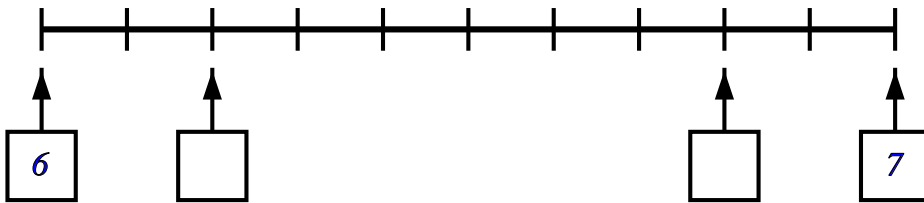
7) Write in the missing numbers

[1]



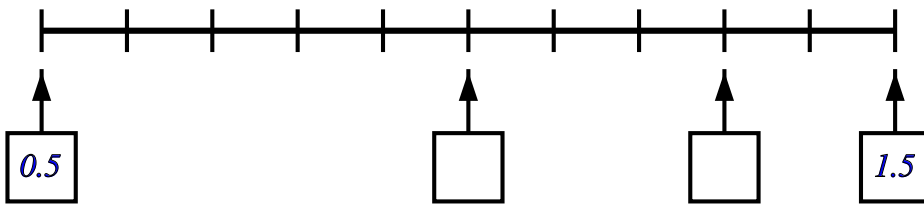
8) Write in the missing numbers

[1]



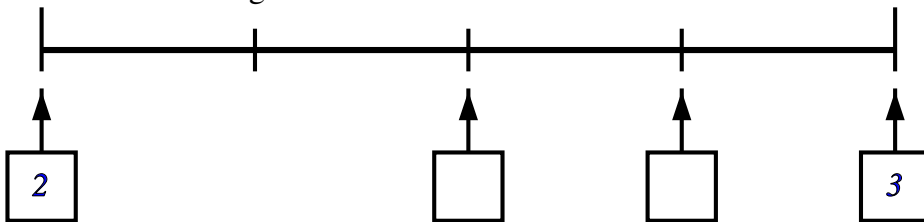
9) Write in the missing numbers

[1]



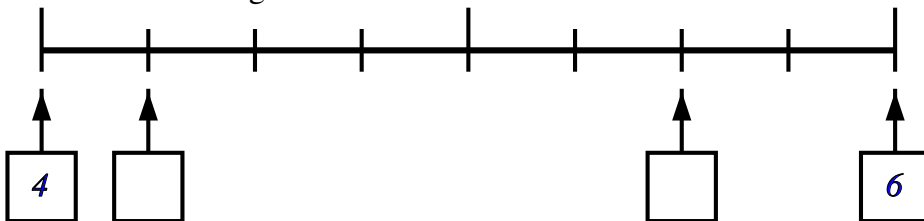
10) Write in the missing numbers

[1]



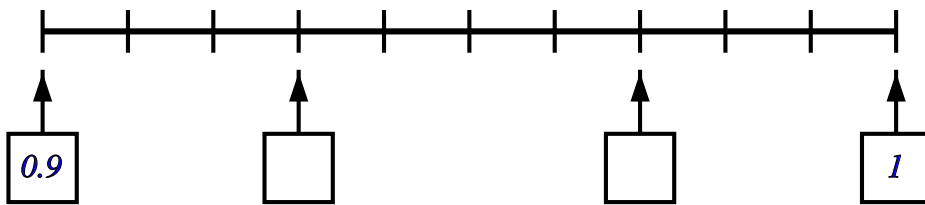
11) Write in the missing numbers

[1]



12) Write in the missing numbers

[1]



Solutions for the assessment Number line - whole numbers and decimals

1) missing numbers are 4 and 9

2) missing numbers are 4 and 8

3) missing numbers are 63 and 65

4) missing numbers are 66 and 69

5) missing number is 54

6) missing numbers are -2 and 2

7) missing numbers are 0.5 and 0.8

8) missing numbers are 6.2 and 6.8

9) missing numbers are 1 and 1.3

10) missing numbers are 2.5 and 2.75

11) missing numbers are 4.25 and 5.5

12) missing numbers are 0.93 and 0.97